

Name, Class

Date

Teacher's signature

Unit End Assessment


Grade: 1 | Subject: Math | Volume: 1 | Unit 1: Revisiting Numbers till 10

(Read the questions with the help of your teacher.)

1. Match the names with their numbers.





Seven	8
One	2
Eight	7
Two	1

2. Choose the name for the number of balls shown below.

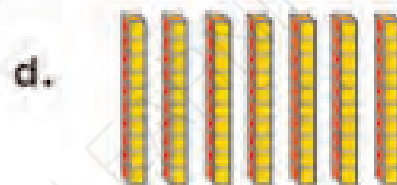
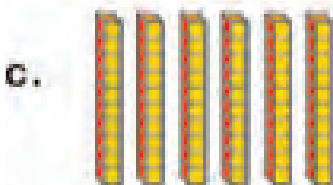
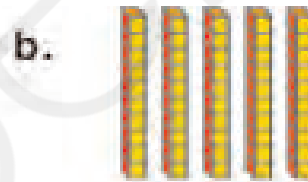



- a. Eleven
b. Fifteen
c. Thirteen
d. Fourteen
3. 3 tens and 5 ones make:
a. 53
b. 15
c. 13
d. 35

4. Which picture shows thirty two flowers?



5. Which of the following pictures will make sixty blocks?



6. What makes forty five?

- a. 4 tens and 4 ones
- b. 5 tens and 5 ones
- c. 4 tens and 5 ones
- d. 5 tens and 4 ones

7. What will 3 tens and 0 ones make?

- a. Thirteen
- b. Thirty
- c. Thirty zeroes
- d. Thirty tens

8. Which number has 4 tens and 2 ones ?

- a. 24
- b. 12
- c. 41
- d. 42

9. In English, 47 is written as_____.

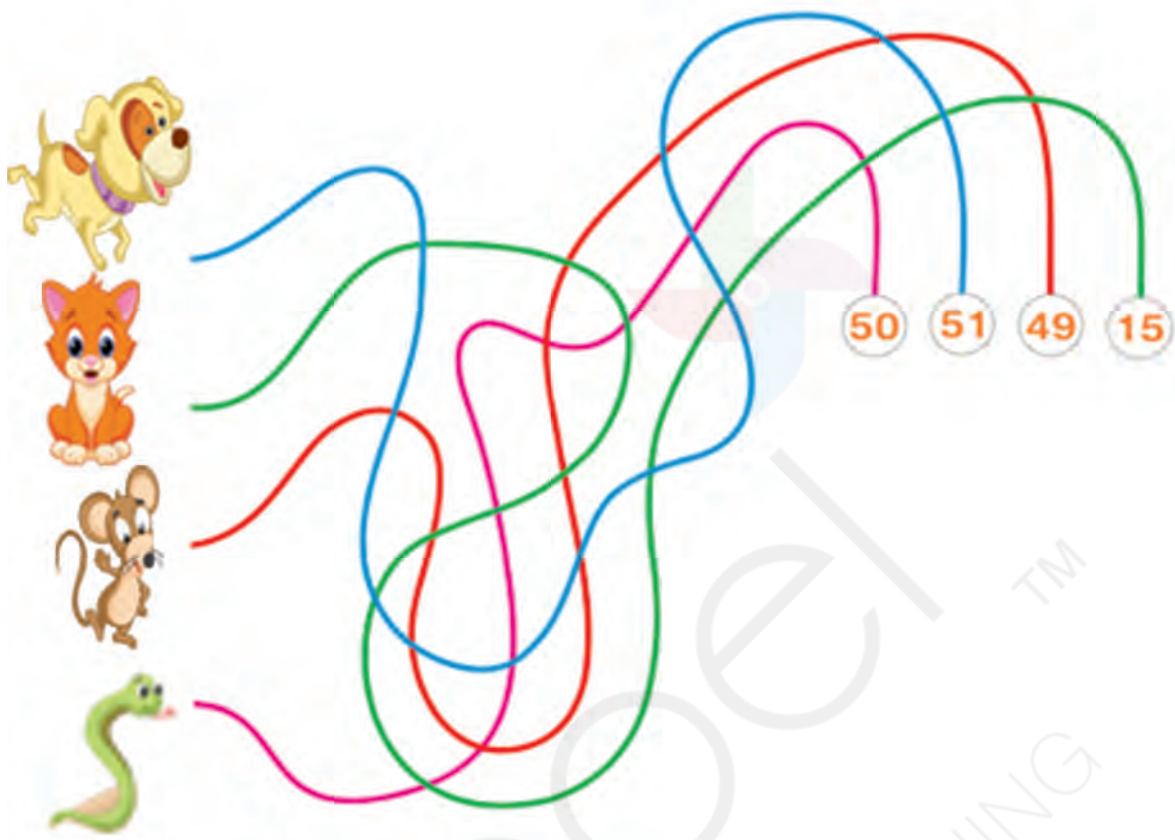
- a. Seventy four
- b. Forty seven
- c. Fourty seven
- d. Seven fourty

10. In English, 17 is written as_____.

- a. Seventy one
- b. Seventy
- c. Seventeen
- d. One seven

11. Choose the animal that can reach fifty.

- a. Rat ☐ b. Cat ☐ c. Dog ☐ d. Snake ☐



How are you feeling?

